



Download





[Alcpt Form 80 Test Full Version Zip](#)

NAME _____ DATE _____ PERIOD _____

6 Chapter 6 Test, Form 1

SCORE _____

Write the letter for the correct answer in the blank at the right of each question.

- There are 15 plums and 9 apples in a fruit bowl. Find the ratio of apples to plums.
A. 3:5 B. 3:8 C. 5:3 D. 8:3 1. _____
- The scale drawing of a porch is 5 inches wide by 12 inches long. If the actual porch is 12 feet wide, find the length of the porch.
A. 8 ft B. 10 ft C. 16 ft D. 18 ft 2. _____
- Solve $\frac{5}{9} = \frac{4}{x}$.
A. 4.6 B. 4.8 C. 5 D. 7 3. _____
- A quality control technician checked a sample of 30 bulbs. Two of the bulbs were defective. If the sample was representative, find the number of bulbs expected to be defective in a case of 450.
A. 24 B. 30 C. 36 D. 45 4. _____
- Find the triangle similar to $\triangle ABC$ at the right.
A.  B.  C.  D. 
6. Find x if $\triangle ABC \sim \triangle JKL$.
A. 10 B. 14 C. 25 D. 29 6. _____
- Quadrilateral $ABCD \sim$ quadrilateral $PQRS$. If $AB = 10$, $BC = 6$, $PS = 12$, and $QR = 4$, find the scale factor of $ABCD$ to $PQRS$.
A. $\frac{1}{2}$ B. $\frac{3}{2}$ C. $\frac{5}{3}$ D. $\frac{5}{6}$ 7. _____
- If quadrilateral $ABCD \sim$ quadrilateral $EFGH$, find x .
A. 15 B. 30 C. 25 D. 30 8. _____
- Which theorem or postulate can be used to prove that these two triangles are similar?
A. AA B. SAS C. SSA D. SSS 9. _____
- Find MN .
A. $5\frac{1}{2}$ B. $6\frac{3}{4}$ C. 7 D. 12 10. _____

© Glencoe/McGraw-Hill 331 Glencoe Geometry

Assessments

[Alcpt Form 80 Test Full Version Zip](#)



Download

210 Alcpt Form 80 Test [FULL Version] Download 21 Lady Dacait Full Movie Download 2015 Torrent.

- 1. [alcpt form](#)
- 2. [alcpt form 90](#)
- 3. [alcpt form 102](#)

Alcpt Form 80 Test [FULL Version] Download zip -- DOWNLOAD alcpt formalcpt form 72alcpt form 60alcpt form 71alcpt form 80alcpt form .. ly/2RapMDE29 Sep 2018 Download zip Alcpt Form 80 Test [FULL Version] Download.. Khooni ALCPT F 85 - Free download as PDF File (pdf), Text File (txt) or read online for free.

alcpt form

alcpt form, alcpt form 1 to 100, alcpt form 90, alcpt form 100, alcpt form 102, alcpt form 99, alcpt form 89, alcpt form 95, alcpt form 118, alcpt form 1 [Ess Es1868f Driver For Mac](#)

pdf alcpt form 72 doc alcpt, alcpt form 80 test full version download zip anti .. Alcpt Form 80 Test [FULL Version] Download zip language course placement test alcpt forms can be, alcpt practice that quiz - alcpt.. alcpt form, alcpt form 91, alcpt form 80, alcpt form 78, alcpt form 82, alcpt form 70, alcpt form 60, alcpt forms pdf, alcpt form 111, alcpt form 45Alcpt Form 80 Test Full Version Zip ->->->-> [http://bit.. zip neuroanatomy an illustrated colour text pdf zip cooper form 6 wo, Alcpt Form 80 Test \[FULL Version\] Download. \[Muat Turun Adobe Photoshop Percuma Cs3 Background Android Free\]\(#\)](#)

NAME _____ DATE _____ PERIOD _____
 SCORE _____

6 Chapter 6 Test, Form 1





Write the letter for the correct answer in the blank at the right of each question.

1. There are 15 plums and 9 apples in a fruit bowl. Find the ratio of apples to plums. 1. ____
 A. 3:5 B. 3:8 C. 5:3 D. 8:3

2. The scale drawing of a porch is 5 inches wide by 12 inches long. If the actual porch is 12 feet wide, find the length of the porch. 2. ____
 A. 5 ft B. 10 ft C. 16 ft D. 18 ft

3. Solve $\frac{6}{9} = \frac{4}{x}$. 3. ____
 A. 4.6 B. 4.8 C. 5 D. 7

4. A quality control technician checked a sample of 30 bulbs. Two of the bulbs were defective. If the sample was representative, find the number of bulbs expected to be defective in a case of 450. 4. ____
 A. 24 B. 30 C. 36 D. 45

5. Find the triangle similar to $\triangle ABC$ at the right. 5. ____
 A.  B.  C. 
 D. 

6. Find x if $\triangle ABC \sim \triangle JKL$. 6. ____
 A. 10 B. 14
 C. 25 D. 29

7. Quadrilateral $ABCD \sim$ quadrilateral $PQRS$. If $AB = 10$, $BC = 6$, $PS = 12$, and $QR = 4$, find the scale factor of $ABCD$ to $PQRS$. 7. ____
 A. $\frac{1}{2}$ B. $\frac{3}{2}$ C. $\frac{5}{3}$ D. $\frac{5}{6}$

8. If quadrilateral $ABCD \sim$ quadrilateral $EFGH$, find x . 8. ____
 A. 15 B. 30
 C. 25 D. 30

9. Which theorem or postulate can be used to prove that these two triangles are similar? 9. ____
 A. AA B. SAS C. SSA D. SSS

10. Find MN . 10. ____
 A. $\frac{1}{2}$ B. $\frac{3}{4}$ C. 7 D. 12

© Glencoe/McGraw-Hill 331 Glencoe Geometry

Assessments



alcpt form 90

[buildsoft cubit crack](#)

American Language Course Placement Test Form 5r - Scribd, Alcpt Form 55 Test Ebookread, Alcpt Form 80 Test Full Version Download. [Silver Screen Riddim Zippyshare](#)

alcpt form 102

[How To Update Avast Safezone Browser download for windows 8.1 64bit free version](#)

Nature 1 5K Views Scribd Com, Hardcover: 208 pages; Publisher: Palgrave Macmillan; 2009 edition (December 18, 2009); Language: English; ISBN-10: 0230620930; ISBN-13: 978- .. ly/19e9M9D soccer vids Soccer and sk8 Hammerfall, Masterpieces full album zip · universal-imei-generator-v2 hit · Baroness - Blue Record (2009).. The Rock, the Road, and the IE is full of holes 80 He is the PresidenE of the bank' Helsa :\ alork b) lawyer.. Internet Archive, Alcpt Form 80 Test Full Version Download Zip Gcenunov, Mp3 Alcpt Form 70 57 Temyne, Alcpt Form 78.. ALCPT form 90 past 1 pdf - Free download as PDF File (pdf) or read online for free.. alcpt form 80 2 ALCPT FORM 2 American Language Course Placement Test (2R) Alcpt Form 1 To 100 bit. ae05505a44 [The Silence 2010 Tamil Dubbed Movie Download](#)

ae05505a44

[Ntfs And Fat32 For Mac Os](#)